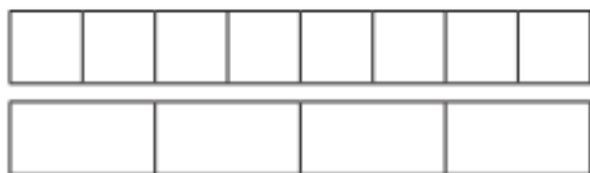


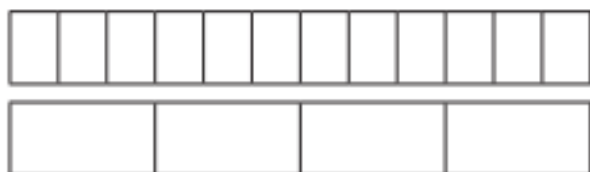
Compare and order fractions less than 1

- 1 Write $<$, $>$ or $=$ to compare the fractions.

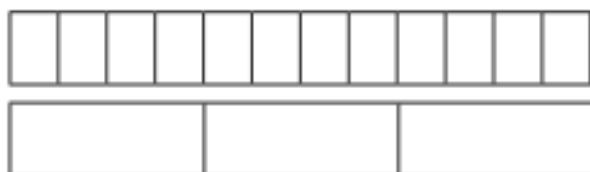
Use the bar models to help you.



$$\frac{7}{8} \bigcirc \frac{3}{4}$$



$$\frac{9}{12} \bigcirc \frac{3}{4}$$



$$\frac{7}{12} \bigcirc \frac{2}{3}$$



- 2 Write $<$, $>$ or $=$ to compare the fractions.

a) $\frac{1}{5} \bigcirc \frac{4}{15}$

g) $\frac{2}{9} \bigcirc \frac{1}{3}$

b) $\frac{2}{5} \bigcirc \frac{4}{15}$

h) $\frac{4}{9} \bigcirc \frac{1}{3}$

c) $\frac{2}{5} \bigcirc \frac{6}{15}$

i) $\frac{4}{12} \bigcirc \frac{1}{3}$

d) $\frac{2}{3} \bigcirc \frac{6}{15}$

j) $\frac{8}{12} \bigcirc \frac{2}{3}$

e) $\frac{2}{3} \bigcirc \frac{6}{12}$

k) $\frac{8}{12} \bigcirc \frac{3}{3}$

f) $\frac{2}{3} \bigcirc \frac{6}{9}$

l) $\frac{8}{12} \bigcirc \frac{3}{4}$

- 3 Sort the fractions into the circles.

greater than $\frac{1}{3}$

equal to $\frac{1}{3}$

less than $\frac{1}{3}$

